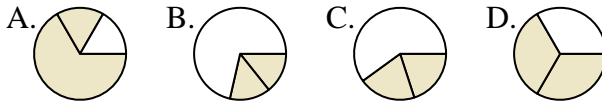




Determine which letter best represents each fraction.

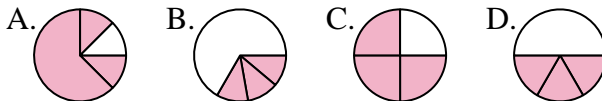
**Answers**

1) Which choice best shows  $\frac{2}{3}$  ?



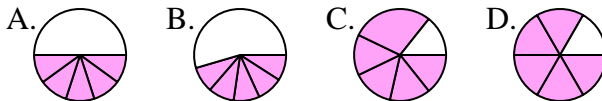
1. \_\_\_\_\_

2) Which choice best shows  $\frac{3}{4}$  ?



2. \_\_\_\_\_

3) Which choice best shows  $\frac{5}{6}$  ?



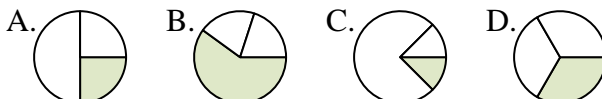
3. \_\_\_\_\_

4) Which choice best shows  $\frac{1}{8}$  ?



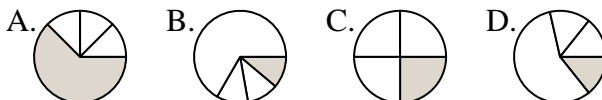
4. \_\_\_\_\_

5) Which choice best shows  $\frac{1}{3}$  ?



5. \_\_\_\_\_

6) Which choice best shows  $\frac{1}{4}$  ?



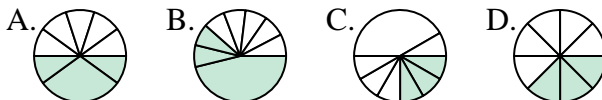
6. \_\_\_\_\_

7) Which choice best shows  $\frac{3}{6}$  ?



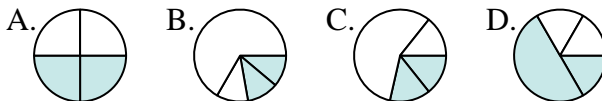
7. \_\_\_\_\_

8) Which choice best shows  $\frac{3}{8}$  ?



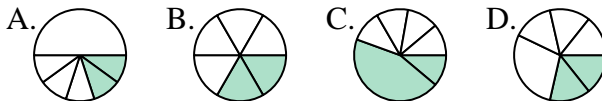
8. \_\_\_\_\_

9) Which choice best shows  $\frac{2}{4}$  ?



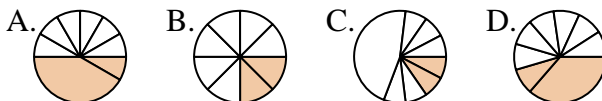
9. \_\_\_\_\_

10) Which choice best shows  $\frac{2}{6}$  ?



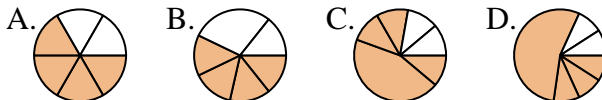
10. \_\_\_\_\_

11) Which choice best shows  $\frac{2}{8}$  ?



11. \_\_\_\_\_

12) Which choice best shows  $\frac{4}{6}$  ?

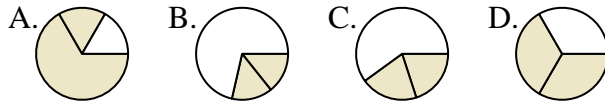


12. \_\_\_\_\_

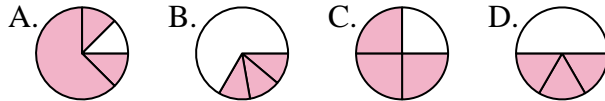


Determine which letter best represents each fraction.

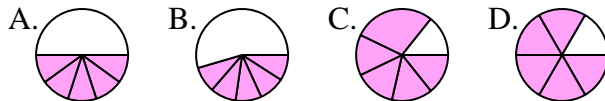
1) Which choice best shows  $\frac{2}{3}$  ?



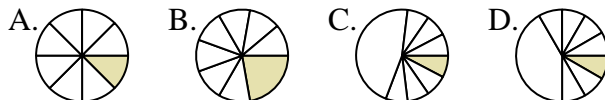
2) Which choice best shows  $\frac{3}{4}$  ?



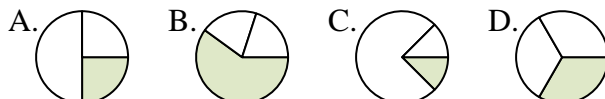
3) Which choice best shows  $\frac{5}{6}$  ?



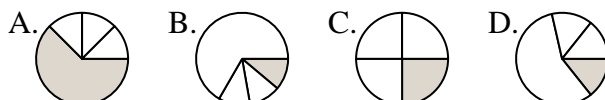
4) Which choice best shows  $\frac{1}{8}$  ?



5) Which choice best shows  $\frac{1}{3}$  ?



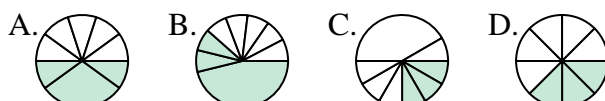
6) Which choice best shows  $\frac{1}{4}$  ?



7) Which choice best shows  $\frac{3}{6}$  ?



8) Which choice best shows  $\frac{3}{8}$  ?



9) Which choice best shows  $\frac{2}{4}$  ?



10) Which choice best shows  $\frac{2}{6}$  ?



11) Which choice best shows  $\frac{2}{8}$  ?



12) Which choice best shows  $\frac{4}{6}$  ?



Answers

1.   **D**  

2.   **C**  

3.   **D**  

4.   **A**  

5.   **D**  

6.   **C**  

7.   **D**  

8.   **D**  

9.   **A**  

10.   **B**  

11.   **B**  

12.   **A**